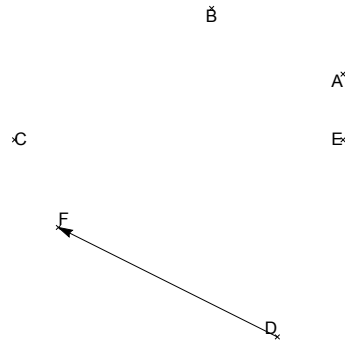


Énoncés des exercices « Géométrie vectorielle dans le plan »

www.deleze.name/marcel/sec2/ex-corriges/1/vecteurs_2d.pdf

Géométrie vectorielle dans le plan - Corrigés

Corrigé de l'exercice 1

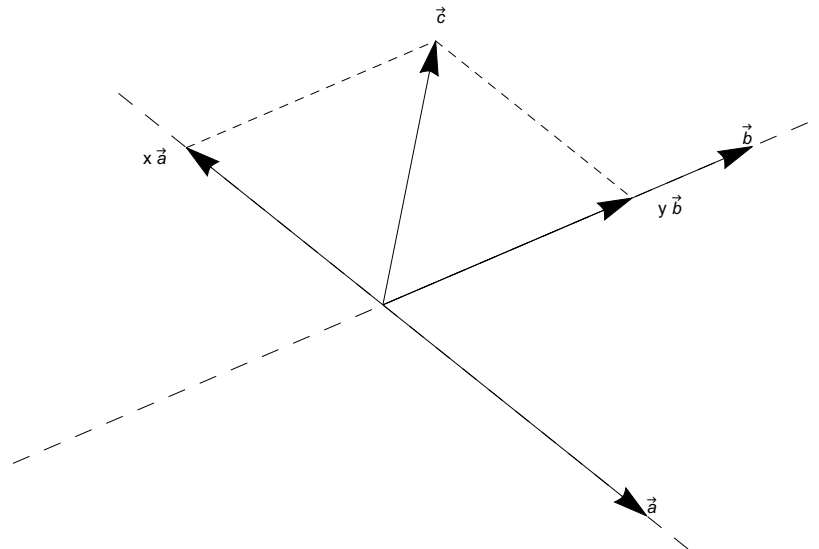


a) $\vec{CE} = \vec{AD} - 2\vec{BC} = \vec{AD} + 2\vec{CB}$

b) $\vec{DF} = \frac{5}{3}\vec{AB}$

Corrigé de l'exercice 2

a) $\vec{c} = x\vec{a} + y\vec{b}$



Estimation : $x \approx -\frac{3}{4}$; $y \approx \frac{2}{3}$

b) $x\vec{a} + y\vec{b} = \vec{c}$

$$x \begin{pmatrix} 5 \\ -4 \end{pmatrix} + y \begin{pmatrix} 7 \\ 3 \end{pmatrix} = \begin{pmatrix} 1 \\ 5 \end{pmatrix}$$

$$\begin{cases} 5x + 7y = 1 & \cdot 4 \\ -4x + 3y = 5 & \cdot 5 \end{cases}$$

$$43y = 29; y = \frac{29}{43}$$

$$x = \frac{1 - 7y}{5} = \frac{1 - \frac{203}{43}}{5} = \frac{-160}{215} = -\frac{32}{43}$$

$$\vec{c} = -\frac{32}{43}\vec{a} + \frac{29}{43}\vec{b}$$

Corrigé de l'exercice 3

a)

$$\sqrt{(2m - 1)^2 + 4^2} = 7$$

$$(2m - 1)^2 + 16 = 49$$

$$4m^2 - 4m + 1 + 16 - 49 = 0$$

$$4m^2 - 4m - 32 = 0$$

$$m^2 - m - 8 = 0$$

$$\Delta = (-1)^2 - 4 \cdot 1 \cdot (-8) = 33; m_1 = \frac{1 - \sqrt{33}}{2} \simeq -2.37228; m_2 = \frac{1 + \sqrt{33}}{2} \simeq 3.37228$$

b)

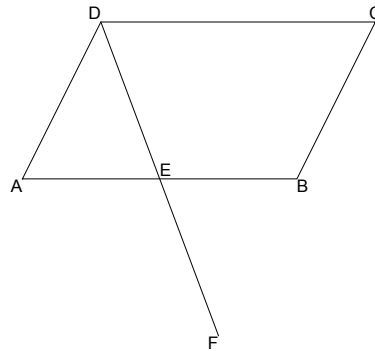
$$\begin{vmatrix} m+1 & 3 \\ 2 & m-1 \end{vmatrix} = (m+1)(m-1) - 2 \cdot 3 = m^2 - 1 - 6 = m^2 - 7 = 0$$

$$m \in \{-\sqrt{7}, \sqrt{7}\}$$

c)

$$\begin{pmatrix} 3m \\ 5 \end{pmatrix} \perp \begin{pmatrix} 2 \\ m \end{pmatrix} \iff 3m \cdot 2 + 5 \cdot m = 0 \iff 11m = 0 \iff m = 0$$

Corrigé de l'exercice 4



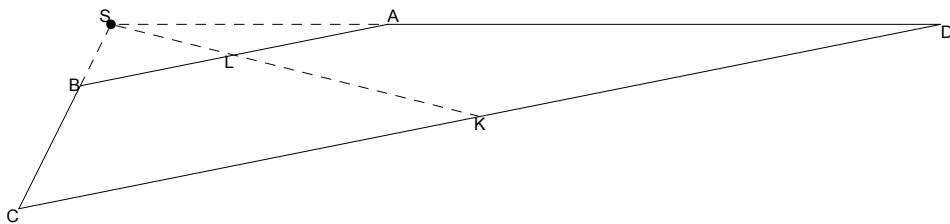
$$\text{Hypothèses : } \vec{FE} = \vec{ED}, \vec{EB} = \vec{AE}, \vec{CB} = \vec{DA}.$$

$$\text{Conclusion : } \vec{FB} = \vec{BC} \iff \vec{FB} - \vec{BC} = \vec{0} \iff \vec{FB} + \vec{CB} = \vec{0}.$$

En effet,

$$\begin{aligned}
 \overrightarrow{FB} + \overrightarrow{CB} &= \overrightarrow{FE} + \overrightarrow{EB} + \overrightarrow{CB} \\
 &= \overrightarrow{ED} + \overrightarrow{EB} + \overrightarrow{DA} \\
 &= \overrightarrow{EB} + \overrightarrow{ED} + \overrightarrow{DA} \\
 &= \overrightarrow{EB} + \overrightarrow{EA} \\
 &= \overrightarrow{AE} + \overrightarrow{EA} \\
 &= \overrightarrow{AA} \\
 &= \vec{0} \quad \blacksquare
 \end{aligned}$$

Corrigé de la question 5



a) Par rapport à la base (\vec{i}, \vec{j})

$$\overrightarrow{BA} = \begin{pmatrix} 3 - (-2) \\ 5 - 4 \end{pmatrix} = \begin{pmatrix} 5 \\ 1 \end{pmatrix}; \quad \overrightarrow{CD} = \begin{pmatrix} 12 - (-3) \\ 5 - 2 \end{pmatrix} = \begin{pmatrix} 15 \\ 3 \end{pmatrix}; \quad \overrightarrow{CD} = 3\overrightarrow{BA}$$

b) Par rapport à la base $(\overrightarrow{BA}, \overrightarrow{BC})$

$$\overrightarrow{DA} = \overrightarrow{DC} + \overrightarrow{CB} + \overrightarrow{BA} = -3\overrightarrow{BA} - \overrightarrow{BC} + \overrightarrow{BA} = -2\overrightarrow{BA} - \overrightarrow{BC} = \begin{pmatrix} -2 \\ -1 \end{pmatrix}$$

$$\begin{aligned}
 \overrightarrow{KL} &= \overrightarrow{KC} + \overrightarrow{CB} + \overrightarrow{BL} = -\frac{1}{2}\overrightarrow{CD} - \overrightarrow{BC} + \frac{1}{2}\overrightarrow{BA} \\
 &= -\frac{3}{2}\overrightarrow{BA} - \overrightarrow{BC} + \frac{1}{2}\overrightarrow{BA} = -\overrightarrow{BA} - \overrightarrow{BC} = \begin{pmatrix} -1 \\ -1 \end{pmatrix}
 \end{aligned}$$

c) Par rapport à la base $(\overrightarrow{BA}, \overrightarrow{BC})$

$$\overrightarrow{CS}_1 = \overrightarrow{CD} + \overrightarrow{DS}_1 = 3\overrightarrow{BA} + \frac{3}{2}\overrightarrow{DA} = 3\begin{pmatrix} 1 \\ 0 \end{pmatrix} + \frac{3}{2}\begin{pmatrix} -2 \\ -1 \end{pmatrix} = \begin{pmatrix} 0 \\ -\frac{3}{2} \end{pmatrix}$$

$$\overrightarrow{CS}_2 = \overrightarrow{CK} + \overrightarrow{KS}_2 = \frac{1}{2}\overrightarrow{CD} + \frac{3}{2}\overrightarrow{KL} = \frac{3}{2}\overrightarrow{BA} + \frac{3}{2}\overrightarrow{KL} = \frac{3}{2}\begin{pmatrix} 1 \\ 0 \end{pmatrix} + \frac{3}{2}\begin{pmatrix} -1 \\ -1 \end{pmatrix} = \begin{pmatrix} 0 \\ -\frac{3}{2} \end{pmatrix}$$

$$\overrightarrow{CS}_3 = \frac{3}{2}\overrightarrow{CB} = -\frac{3}{2}\overrightarrow{BC} = -\frac{3}{2}\begin{pmatrix} 0 \\ 1 \end{pmatrix} = \begin{pmatrix} 0 \\ -\frac{3}{2} \end{pmatrix}$$

Donc

$$\overrightarrow{CS}_1 = \overrightarrow{CS}_2 = \overrightarrow{CS}_3$$

$$S_1 = S_2 = S_3 = S$$

Les droites AD, KL et BC sont concourantes en S.

Corrigé de l'exercice 6

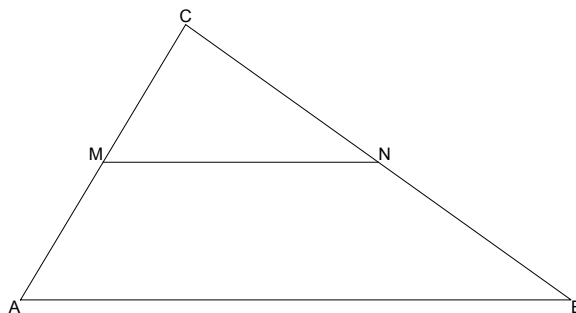
a)

$$\|\vec{a} - \vec{b}\| = \left\| \begin{pmatrix} 5 \\ -2 \end{pmatrix} - \begin{pmatrix} -4 \\ 3 \end{pmatrix} \right\| = \left\| \begin{pmatrix} 9 \\ -5 \end{pmatrix} \right\| = \sqrt{9^2 + (-5)^2} = \sqrt{106}$$

b)

$$\begin{aligned} \vec{PA} + \vec{PB} + \vec{PC} &= \vec{BC} \\ \vec{PB} + \vec{BA} + \vec{PB} + \vec{PB} + \vec{BC} &= \vec{BC} \\ 3\vec{PB} &= \vec{BC} - \vec{BA} - \vec{BC} \\ 3\vec{PB} &= \vec{AB} \\ \vec{PB} &= \frac{1}{3}\vec{AB} \\ \vec{BP} &= \frac{1}{3}\vec{BA} \end{aligned}$$

Corrigé de l'exercice 7



$$\vec{MN} = \vec{MC} + \vec{CN} = \frac{1}{2}\vec{AC} + \frac{1}{2}\vec{CB} = \frac{1}{2}(\vec{AC} + \vec{CB}) = \frac{1}{2}\vec{AB} \quad \blacksquare$$

Corrigé de l'exercice 8

$$\vec{CN} = \frac{1}{2}\vec{AC} \quad \text{où } N(x; y)$$

$$\begin{pmatrix} x - 4.6 \\ y + 1.3 \end{pmatrix} = \frac{1}{2} \begin{pmatrix} 4.6 + 2.7 \\ -1.3 - 3.2 \end{pmatrix}$$

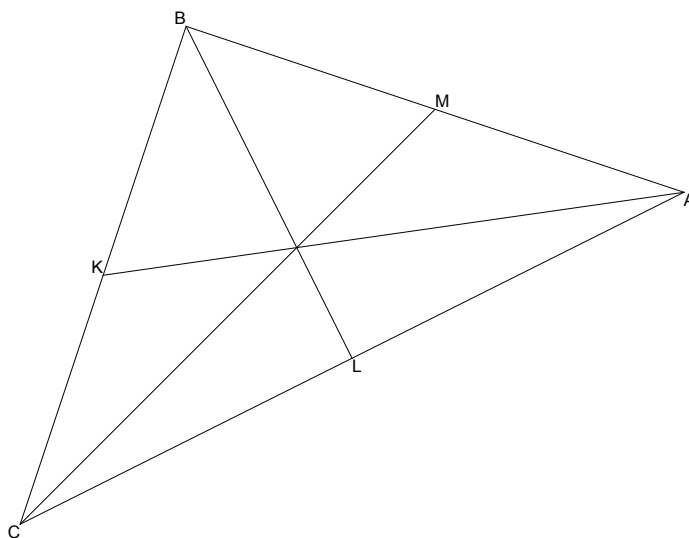
$$\begin{pmatrix} x - 4.6 \\ y + 1.3 \end{pmatrix} = \begin{pmatrix} 3.65 \\ -2.25 \end{pmatrix}$$

$$x = 8.25; \quad y = -3.55; \quad N(8.25; -3.55) = N\left(\frac{33}{4}; -\frac{71}{20}\right)$$

Corrigé de l'exercice 9

Hypothèses

$$\overrightarrow{KC} = \frac{1}{2}\overrightarrow{BC}; \quad \overrightarrow{LA} = \frac{1}{2}\overrightarrow{CA}; \quad \overrightarrow{MB} = \frac{1}{2}\overrightarrow{AB}$$



Conclusion

$$\overrightarrow{KA} + \overrightarrow{LB} + \overrightarrow{MC} = \vec{0}$$

En effet,

$$\begin{aligned} \overrightarrow{KA} + \overrightarrow{LB} + \overrightarrow{MC} &= \overrightarrow{KC} + \overrightarrow{CA} + \overrightarrow{LA} + \overrightarrow{AB} + \overrightarrow{MB} + \overrightarrow{BC} \\ &\stackrel{\text{Hyp}}{=} \frac{1}{2}\overrightarrow{BC} + \overrightarrow{CA} + \frac{1}{2}\overrightarrow{CA} + \overrightarrow{AB} + \frac{1}{2}\overrightarrow{AB} + \overrightarrow{BC} \\ &= \frac{3}{2}\overrightarrow{BC} + \frac{3}{2}\overrightarrow{CA} + \frac{3}{2}\overrightarrow{AB} \\ &= \frac{3}{2}(\overrightarrow{BC} + \overrightarrow{CA} + \overrightarrow{AB}) \\ &= \frac{3}{2}\overrightarrow{BB} \\ &= \frac{3}{2}\vec{0} \\ &= \vec{0} \quad \blacksquare \end{aligned}$$

Lien vers la page mère : [Exercices avec corrigés sur www.deleze.name](http://www.deleze.name)www.deleze.name/marcel/sec2/ex-corriges/index.html